

Year 4 Multiplication Triangles 6, 7 and 9 Times Tables (1)

Fill in the blanks in these multiplication triangles.

1.

\square
 \div \div
3 \times 6

2.

42
 \div \div
 \square \times 6

3.

\square
 \div \div
6 \times 9

4.

6
 \div \div
1 \times \square

5.

72
 \div \div
 \square \times 6

6.

30
 \div \div
6 \times \square

7.

\square
 \div \div
6 \times 6

8.

12
 \div \div
 \square \times 2

9.

\square
 \div \div
6 \times 11

10.

24
 \div \div
6 \times \square

11.

60
 \div \div
 \square \times 6

12.

48
 \div \div
8 \times \square

Year 4 Multiplication Triangles 6, 7 and 9 Times Tables (1) Answers

Fill in the blanks in these multiplication triangles.

1.

$$\begin{array}{c} \boxed{18} \\ \div \quad \div \\ 3 \quad \times \quad 6 \end{array}$$

2.

$$\begin{array}{c} 42 \\ \div \quad \div \\ \boxed{7} \quad \times \quad 6 \end{array}$$

3.

$$\begin{array}{c} \boxed{54} \\ \div \quad \div \\ 6 \quad \times \quad 9 \end{array}$$

4.

$$\begin{array}{c} 6 \\ \div \quad \div \\ 1 \quad \times \quad \boxed{6} \end{array}$$

5.

$$\begin{array}{c} 72 \\ \div \quad \div \\ \boxed{12} \quad \times \quad 6 \end{array}$$

6.

$$\begin{array}{c} 30 \\ \div \quad \div \\ 6 \quad \times \quad \boxed{5} \end{array}$$

7.

$$\begin{array}{c} \boxed{36} \\ \div \quad \div \\ 6 \quad \times \quad 6 \end{array}$$

8.

$$\begin{array}{c} 12 \\ \div \quad \div \\ \boxed{6} \quad \times \quad 2 \end{array}$$

9.

$$\begin{array}{c} \boxed{66} \\ \div \quad \div \\ 6 \quad \times \quad 11 \end{array}$$

10.

$$\begin{array}{c} 24 \\ \div \quad \div \\ 6 \quad \times \quad \boxed{4} \end{array}$$

11.

$$\begin{array}{c} 60 \\ \div \quad \div \\ \boxed{10} \quad \times \quad 6 \end{array}$$

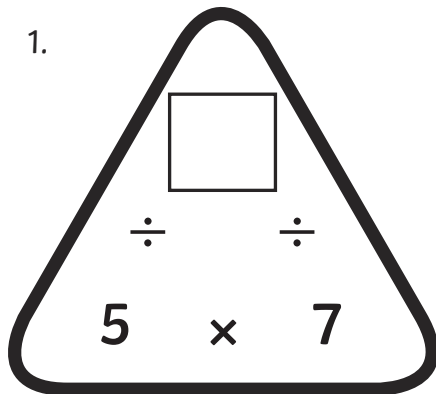
12.

$$\begin{array}{c} 48 \\ \div \quad \div \\ 8 \quad \times \quad \boxed{6} \end{array}$$

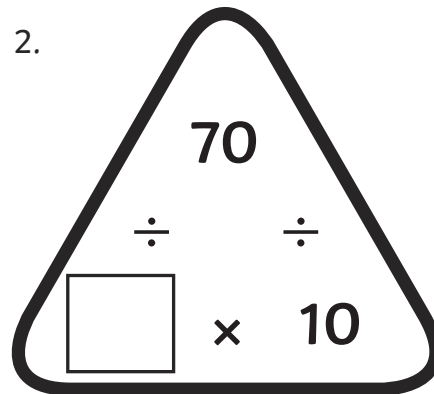
Year 4 Multiplication Triangles 6, 7 and 9 Times Tables (2)

Fill in the blanks in these multiplication triangles.

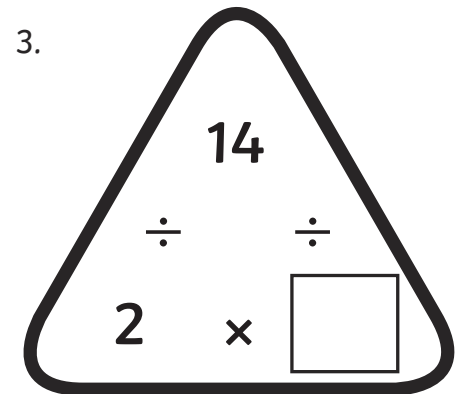
1.


$$\begin{array}{c} \square \\ \div \quad \div \\ 5 \quad \times \quad 7 \end{array}$$

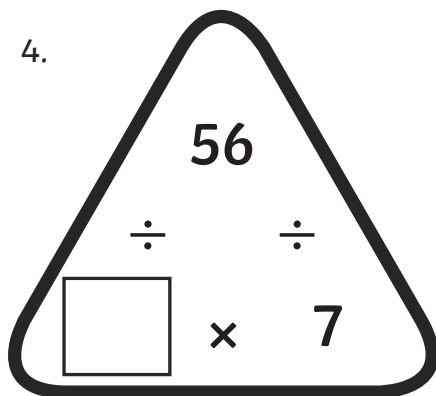
2.


$$\begin{array}{c} 70 \\ \div \quad \div \\ \square \quad \times \quad 10 \end{array}$$

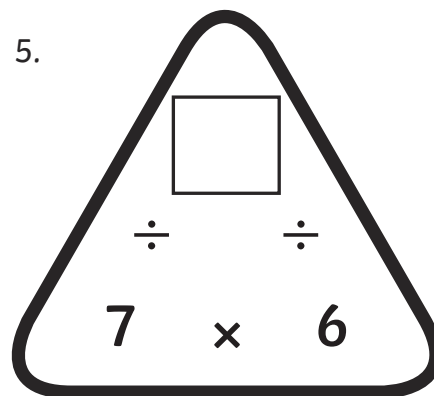
3.


$$\begin{array}{c} 14 \\ \div \quad \div \\ 2 \quad \times \quad \square \end{array}$$

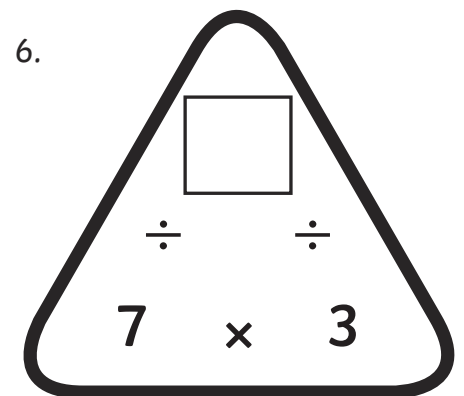
4.


$$\begin{array}{c} 56 \\ \div \quad \div \\ \square \quad \times \quad 7 \end{array}$$

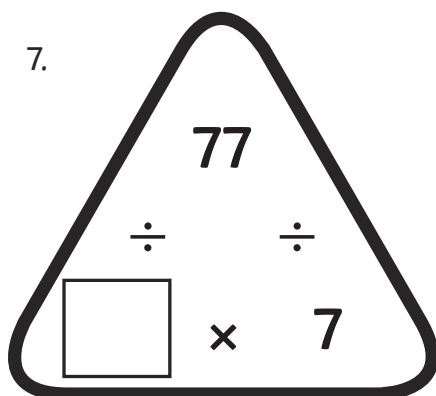
5.


$$\begin{array}{c} \square \\ \div \quad \div \\ 7 \quad \times \quad 6 \end{array}$$

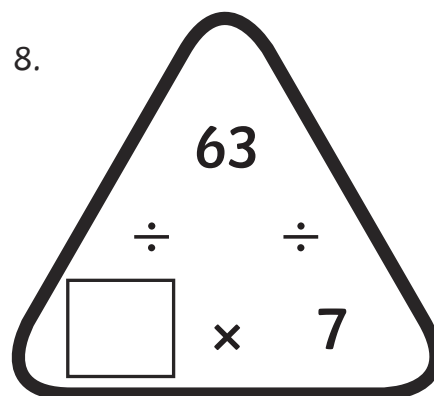
6.


$$\begin{array}{c} \square \\ \div \quad \div \\ 7 \quad \times \quad 3 \end{array}$$

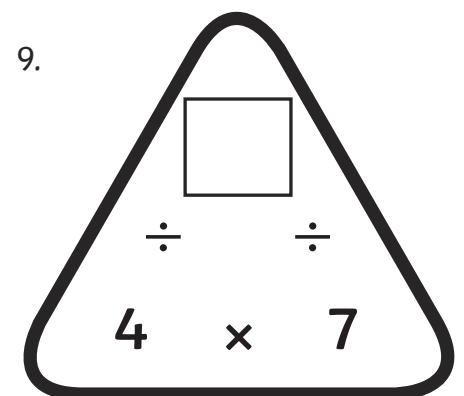
7.


$$\begin{array}{c} 77 \\ \div \quad \div \\ \square \quad \times \quad 7 \end{array}$$

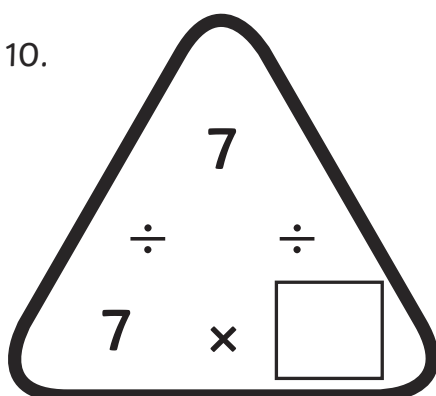
8.


$$\begin{array}{c} 63 \\ \div \quad \div \\ \square \quad \times \quad 7 \end{array}$$

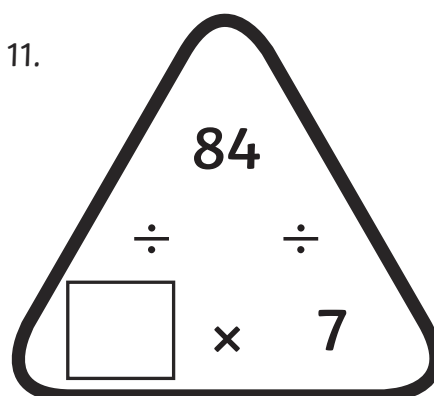
9.


$$\begin{array}{c} \square \\ \div \quad \div \\ 4 \quad \times \quad 7 \end{array}$$

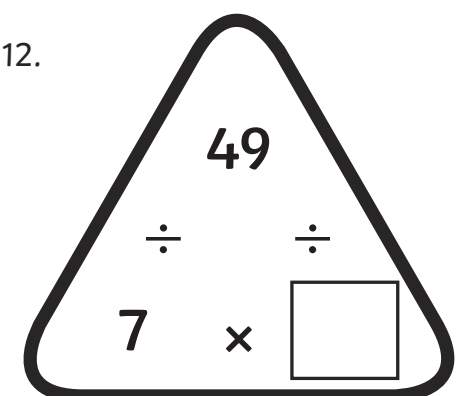
10.


$$\begin{array}{c} 7 \\ \div \quad \div \\ 7 \quad \times \quad \square \end{array}$$

11.


$$\begin{array}{c} 84 \\ \div \quad \div \\ \square \quad \times \quad 7 \end{array}$$

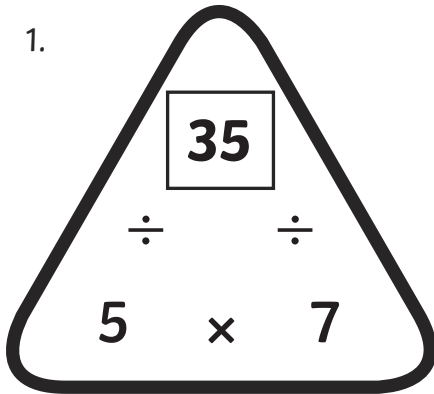
12.


$$\begin{array}{c} 49 \\ \div \quad \div \\ 7 \quad \times \quad \square \end{array}$$

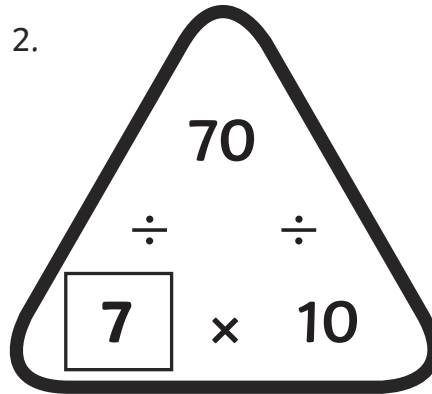
Year 4 Multiplication Triangles 6, 7 and 9 Times Tables (2) Answers

Fill in the blanks in these multiplication triangles.

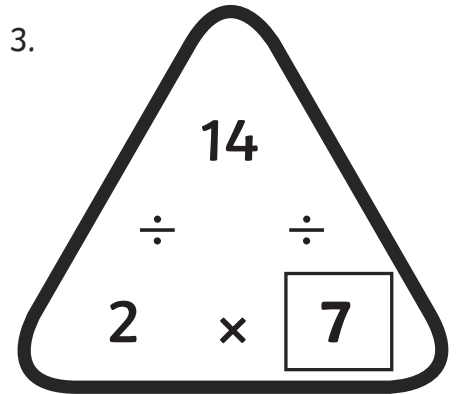
1.



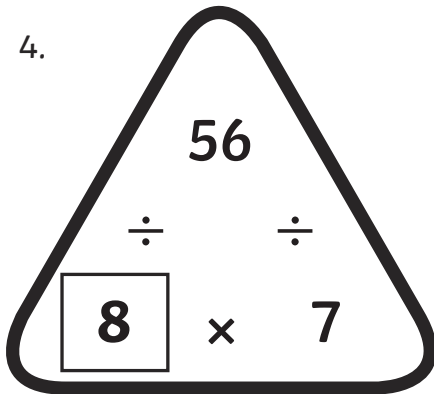
2.



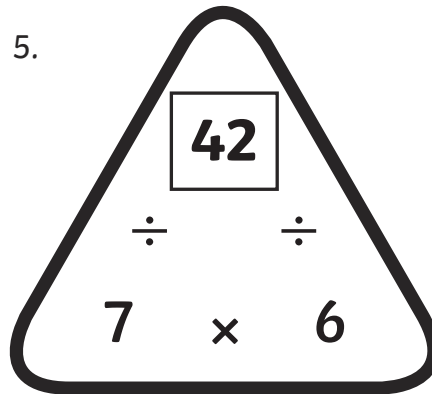
3.



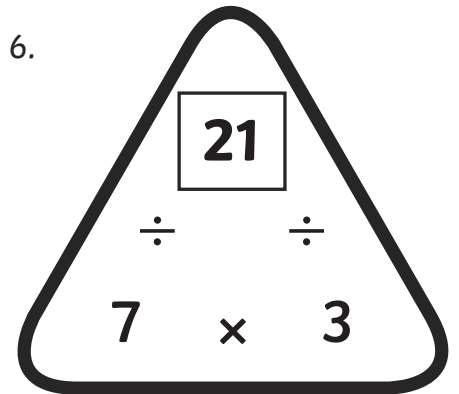
4.



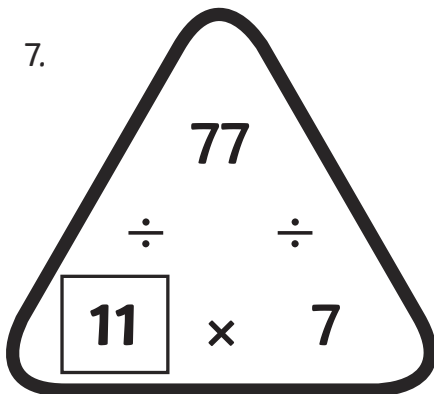
5.



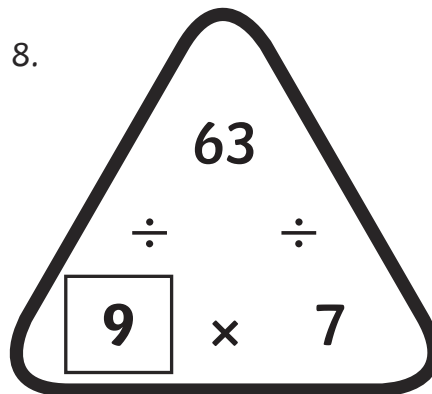
6.



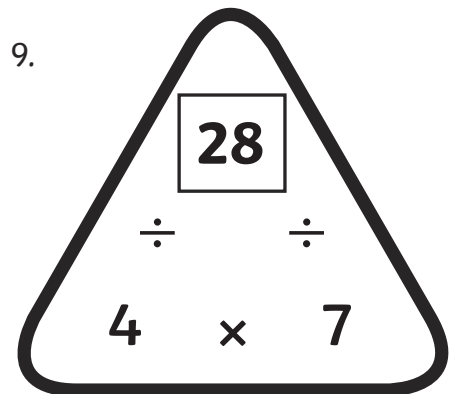
7.



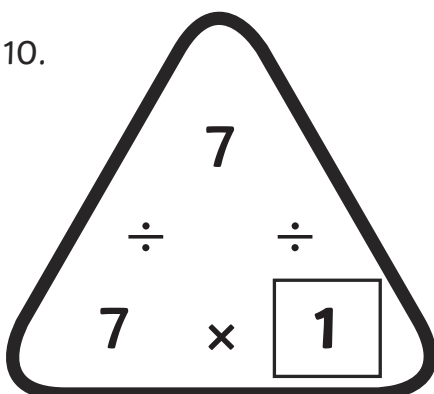
8.



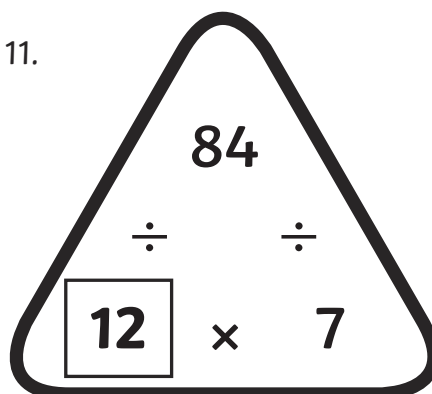
9.



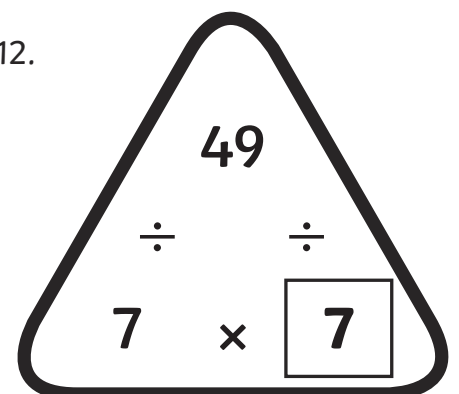
10.



11.



12.



Year 4 Multiplication Triangles 6, 7 and 9 Times Tables (3)

Fill in the blanks in these multiplication triangles.

1.

$$\begin{array}{c} 27 \\ \div \quad \div \\ \square \times 9 \end{array}$$

2.

$$\begin{array}{c} \square \\ \div \quad \div \\ 9 \times 12 \end{array}$$

3.

$$\begin{array}{c} 9 \\ \div \quad \div \\ 1 \times \square \end{array}$$

4.

$$\begin{array}{c} 72 \\ \div \quad \div \\ \square \times 9 \end{array}$$

5.

$$\begin{array}{c} \square \\ \div \quad \div \\ 9 \times 2 \end{array}$$

6.

$$\begin{array}{c} 99 \\ \div \quad \div \\ 9 \times \square \end{array}$$

7.

$$\begin{array}{c} \square \\ \div \quad \div \\ 9 \times 4 \end{array}$$

8.

$$\begin{array}{c} 63 \\ \div \quad \div \\ \square \times 9 \end{array}$$

9.

$$\begin{array}{c} \square \\ \div \quad \div \\ 9 \times 10 \end{array}$$

10.

$$\begin{array}{c} 45 \\ \div \quad \div \\ \square \times 9 \end{array}$$

11.

$$\begin{array}{c} 81 \\ \div \quad \div \\ 9 \times \square \end{array}$$

12.

$$\begin{array}{c} 54 \\ \div \quad \div \\ \square \times 9 \end{array}$$

Year 4 Multiplication Triangles 6, 7 and 9 Times Tables (3) Answers

Fill in the blanks in these multiplication triangles.

1.

$$\begin{array}{c} 27 \\ \div \quad \div \\ \boxed{3} \times 9 \end{array}$$

2.

$$\begin{array}{c} \boxed{108} \\ \div \quad \div \\ 9 \times 12 \end{array}$$

3.

$$\begin{array}{c} 9 \\ \div \quad \div \\ 1 \times \boxed{9} \end{array}$$

4.

$$\begin{array}{c} 72 \\ \div \quad \div \\ \boxed{8} \times 9 \end{array}$$

5.

$$\begin{array}{c} \boxed{18} \\ \div \quad \div \\ 9 \times 2 \end{array}$$

6.

$$\begin{array}{c} 99 \\ \div \quad \div \\ 9 \times \boxed{11} \end{array}$$

7.

$$\begin{array}{c} \boxed{36} \\ \div \quad \div \\ 9 \times 4 \end{array}$$

8.

$$\begin{array}{c} 63 \\ \div \quad \div \\ \boxed{7} \times 9 \end{array}$$

9.

$$\begin{array}{c} \boxed{90} \\ \div \quad \div \\ 9 \times 10 \end{array}$$

10.

$$\begin{array}{c} 45 \\ \div \quad \div \\ \boxed{5} \times 9 \end{array}$$

11.

$$\begin{array}{c} 81 \\ \div \quad \div \\ 9 \times \boxed{9} \end{array}$$

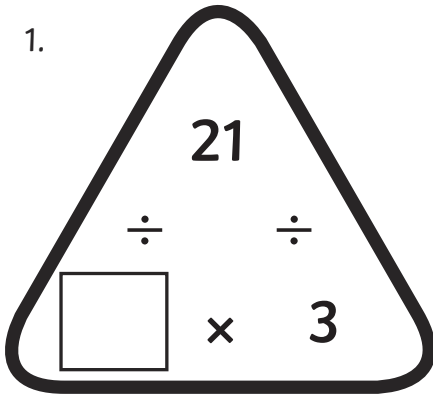
12.

$$\begin{array}{c} 54 \\ \div \quad \div \\ \boxed{6} \times 9 \end{array}$$

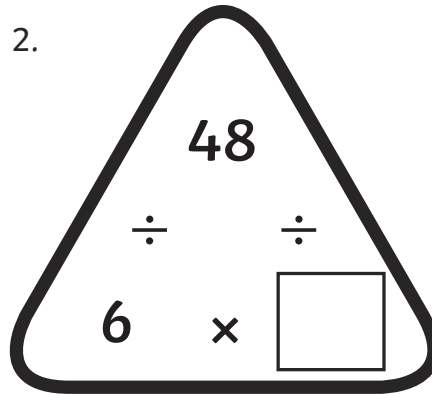
Year 4 Multiplication Triangles 6, 7 and 9 Times Tables (4)

Fill in the blanks in these multiplication triangles.

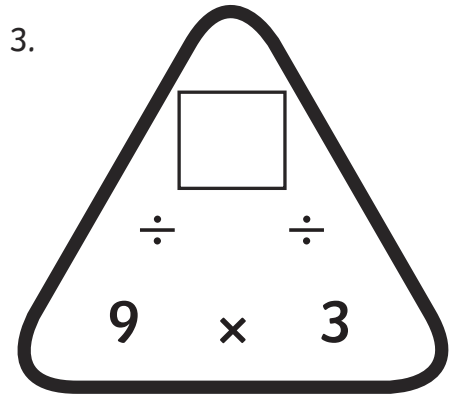
1.



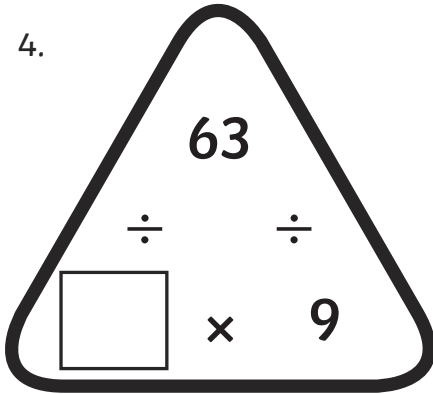
2.



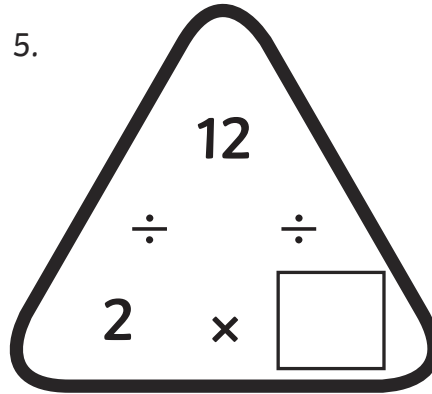
3.



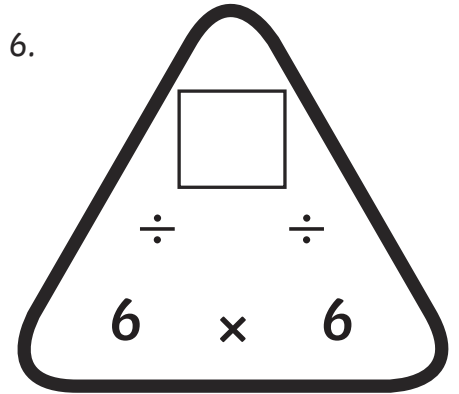
4.



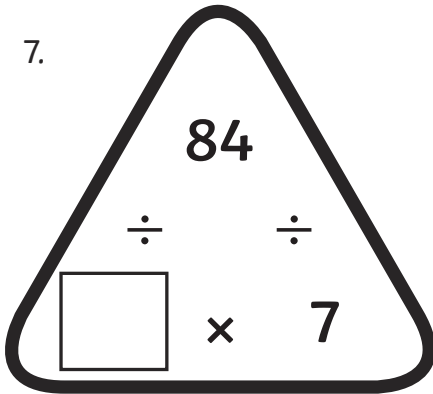
5.



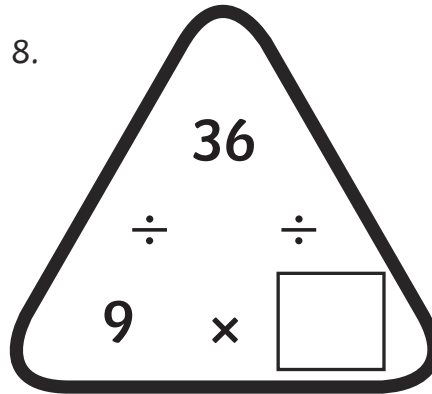
6.



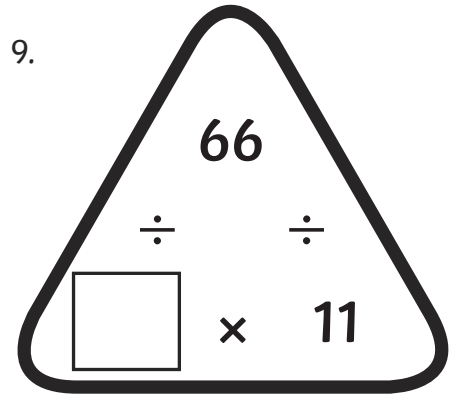
7.



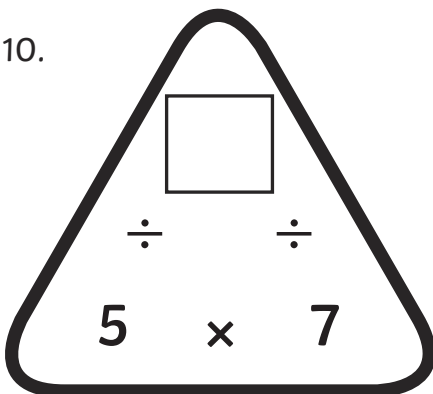
8.



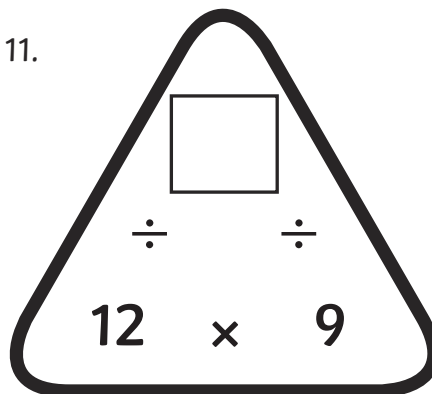
9.



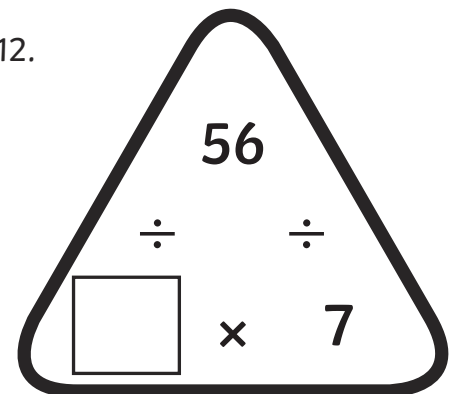
10.



11.



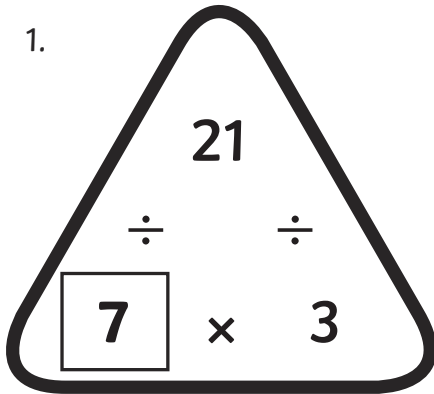
12.



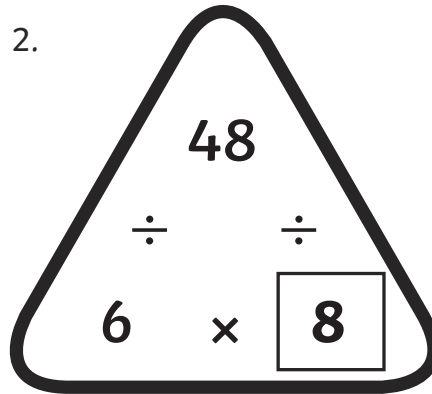
Year 4 Multiplication Triangles 6, 7 and 9 Times Tables (4) Answers

Fill in the blanks in these multiplication triangles.

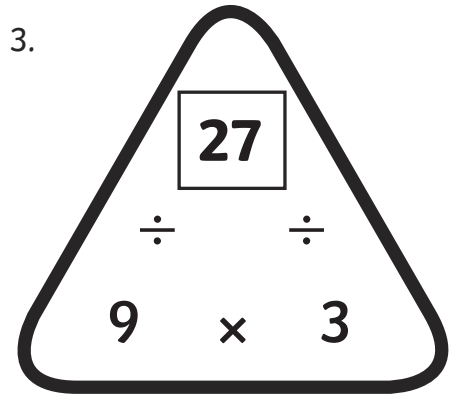
1.



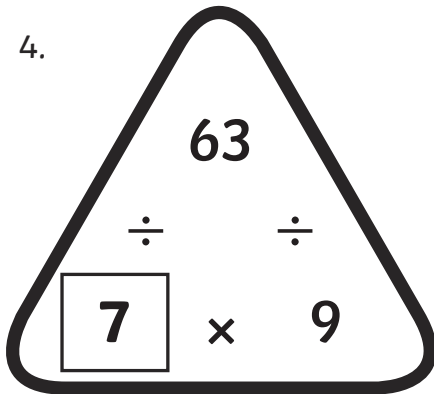
2.



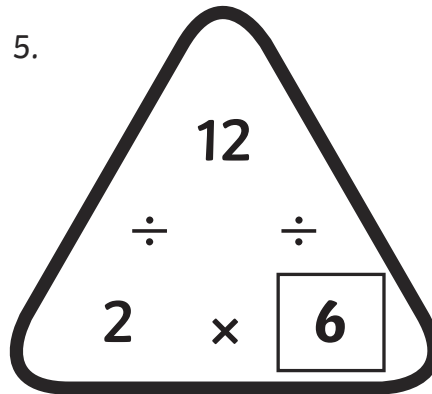
3.



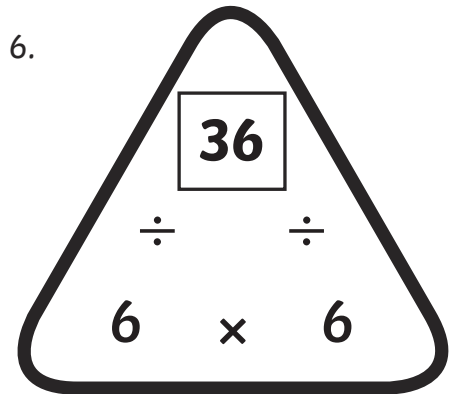
4.



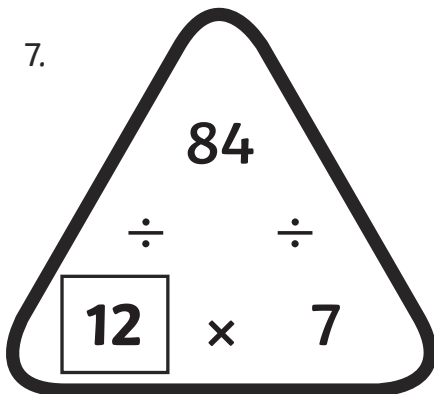
5.



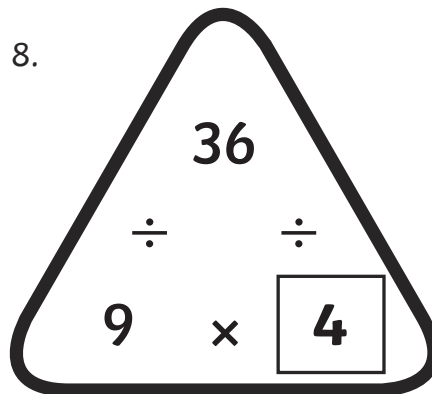
6.



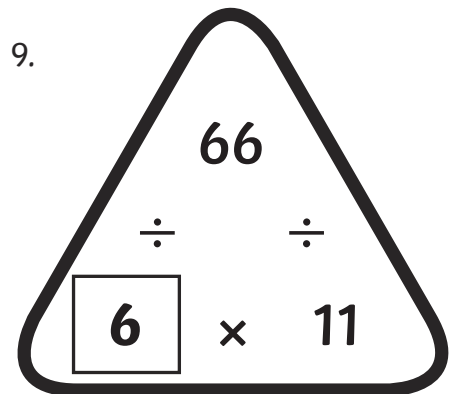
7.



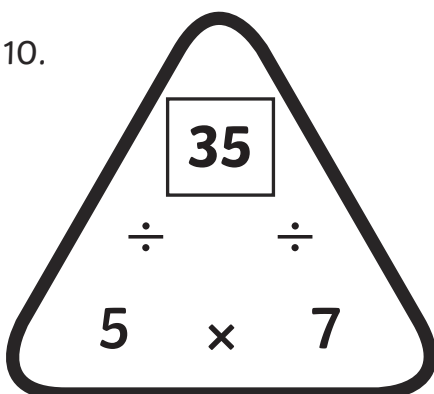
8.



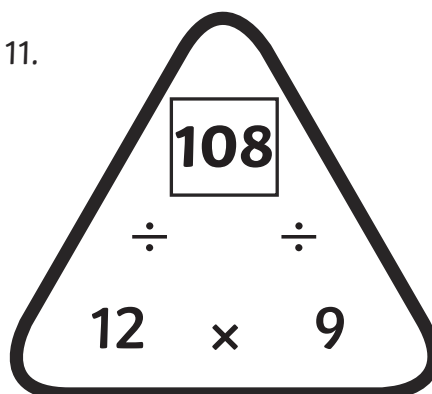
9.



10.



11.



12.

